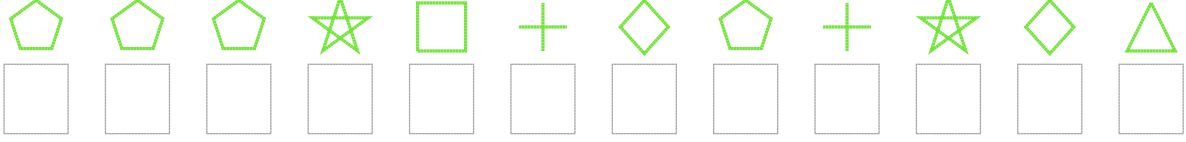


Şekil Sayı Eşleştirme

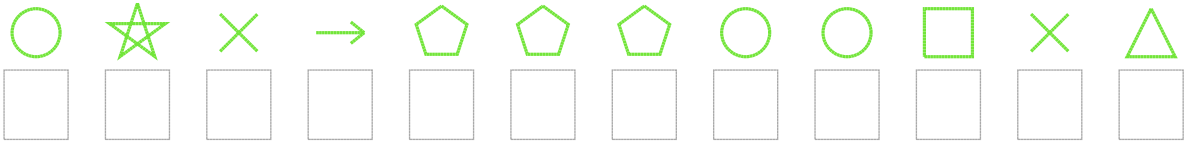


Aşağıdaki uzun şifreleri hatasız çözerek altlarına yazın:

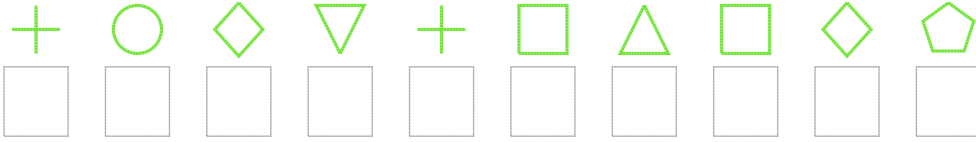
1. Şifre



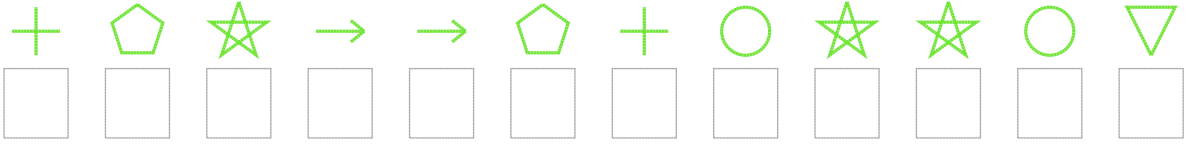
2. Şifre



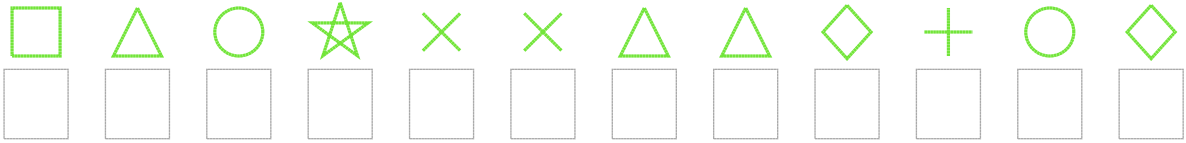
3. Şifre



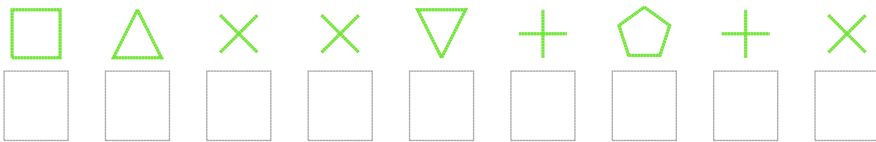
4. Şifre



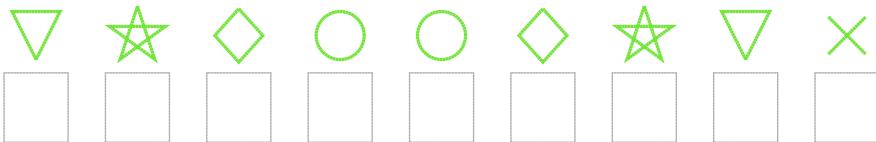
5. Şifre



6. Şifre



7. Şifre



❑ BONUS: 7. ve 1. şifrenin üçüncü rakamının toplamı kaçtır?

Cevap Anahtarı

1. Şifre: 222450920493

2. Şifre: 147622211573

3. Şifre: 0198053592

4. Şifre: 024662014418

5. Şifre: 531477339019

6. Şifre: 537780207

7. Şifre: 849119487

□ Bonus Soru Cevabı: 11